

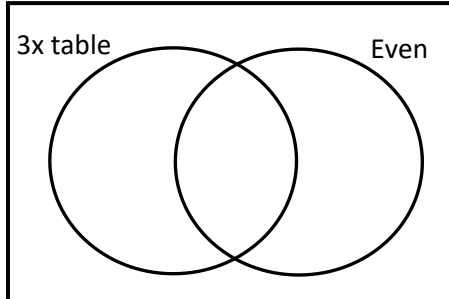


Name: _____

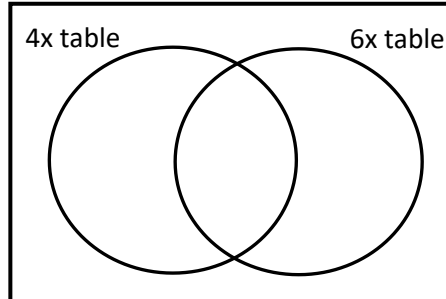


Complete the Venn diagrams with the values given:

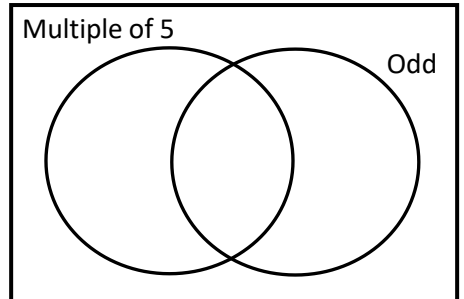
a) 1, 2, 3, 4, 5, 6, 7, 8, 9, 10



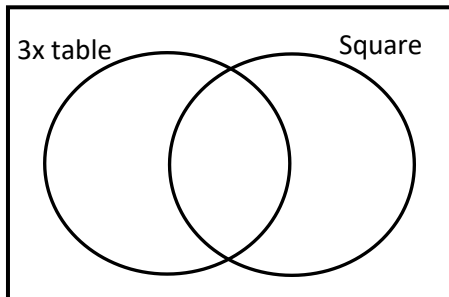
b) 5, 7, 8, 10, 12, 14, 16, 18, 24



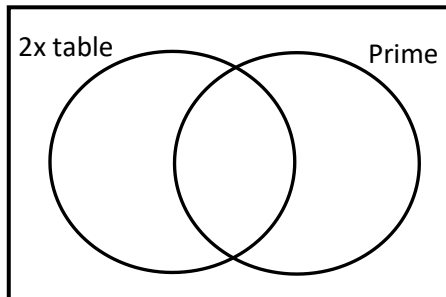
c) 4, 5, 9, 11, 15, 18, 20, 23, 25



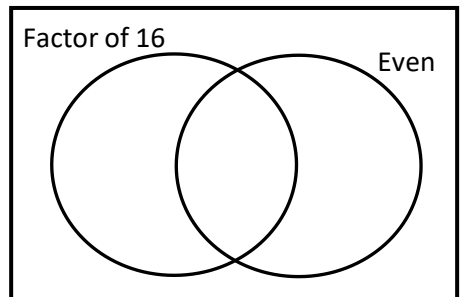
d) 1, 3, 6, 9, 12, 16, 18, 20, 25



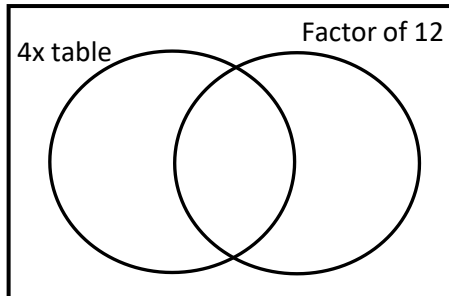
e) 2, 4, 7, 9, 11, 14, 17, 21, 23



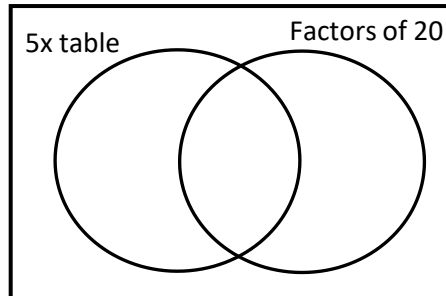
f) 1, 3, 4, 8, 10, 12, 32, 49, 64



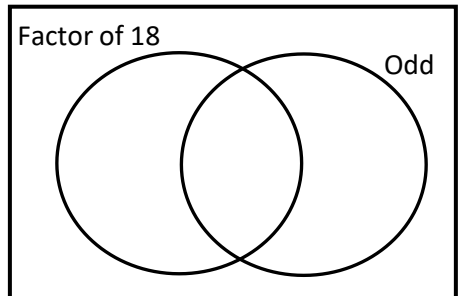
g) 1, 2, 3, 4, 6, 9, 12, 16, 18, 24



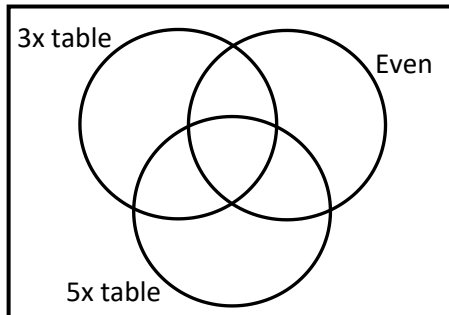
h) 1, 2, 4, 5, 8, 10, 15, 20, 25, 40



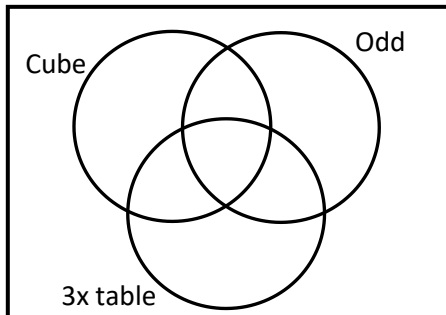
i) 2, 3, 5, 6, 8, 12, 15, 16, 18, 36



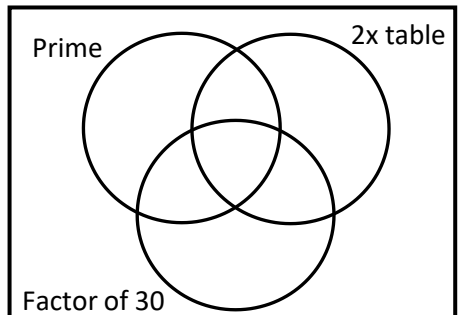
j) 2, 5, 6, 10, 12, 15, 18, 21, 24



k) 1, 2, 3, 4, 6, 8, 9, 15, 27



l) 1, 2, 3, 4, 5, 6, 7, 8, 9, 10, 11



Exam question:

a) Place the numbers 1 to 15 into the Venn diagram.

