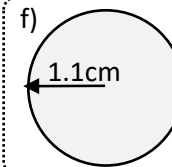
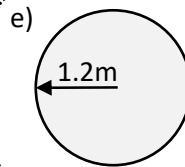
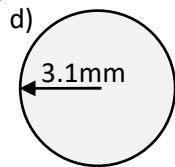
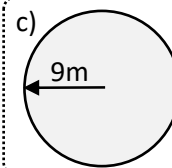
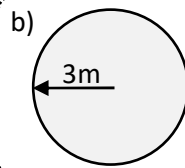
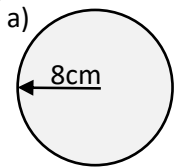




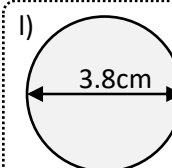
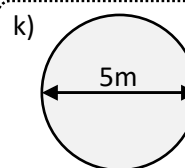
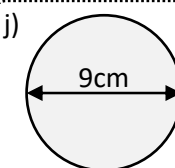
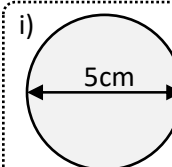
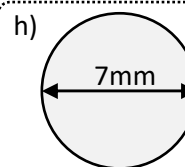
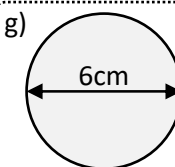
Name: _____



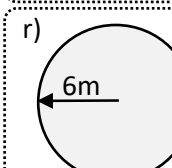
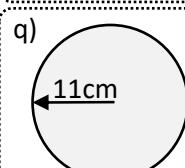
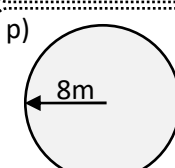
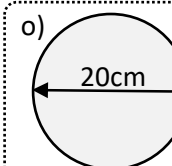
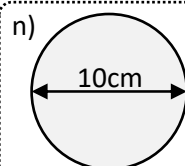
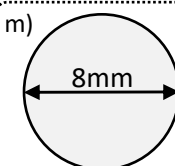
Calculate the area of these circles (leave your answer correct to 2 decimal places):



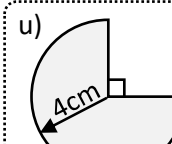
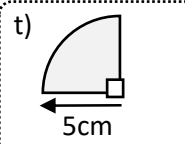
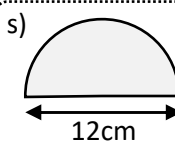
Calculate the area of these circles (leave your answer correct to 2 decimal places):



Calculate the area of these circles **in terms of π** :



Calculate the **area** of these partial circles (to 2 decimal places):



Exam question:

The radius of a circle is 4.80 m.
Work out the area of the circle.
Give your answer correct to 3 significant figures.

