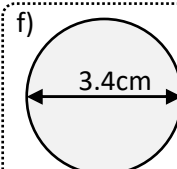
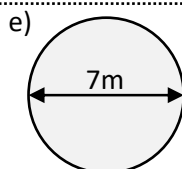
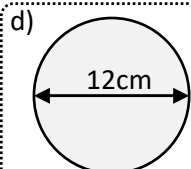
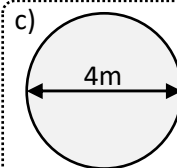
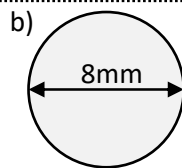
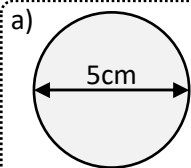




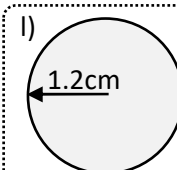
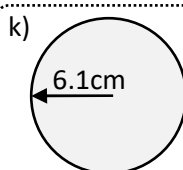
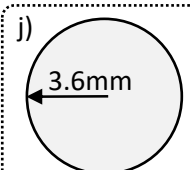
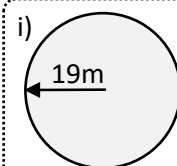
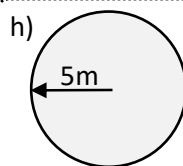
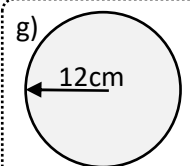
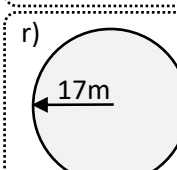
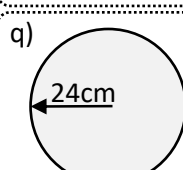
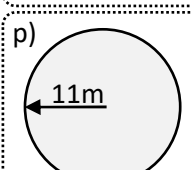
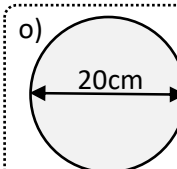
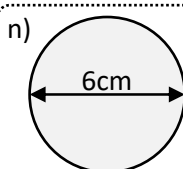
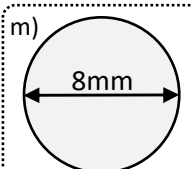
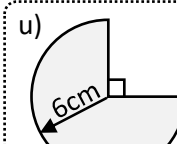
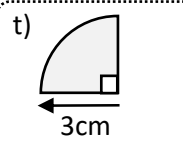
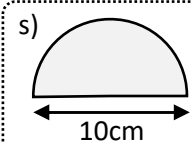
Name: _____



Calculate the circumference of these circles (leave your answer correct to 2 decimal places):



Calculate the circumference of these circles (leave your answer correct to 2 decimal places):

Calculate the circumference of these circles **in terms of π** :Calculate the **perimeter** of these partial circles (to 2 decimal places):

Exam question:

The diameter of a bike's wheel is 0.6m.
Calculate the circumference of the wheel.
Give your answer correct to 2 decimal places.

