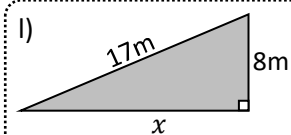
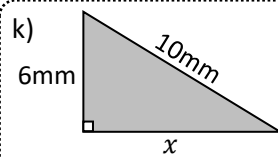
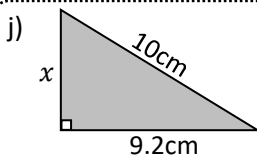
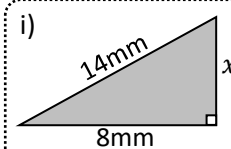
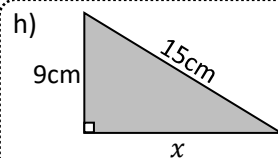
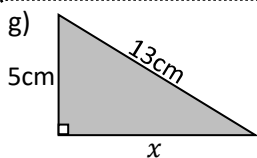
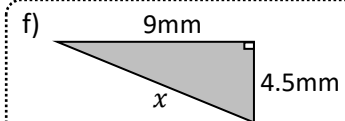
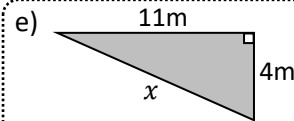
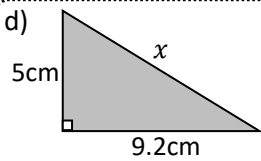
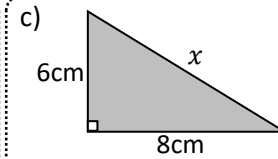
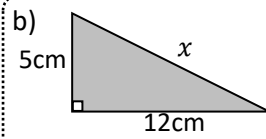
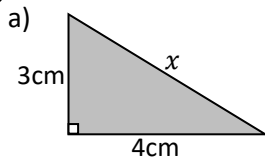




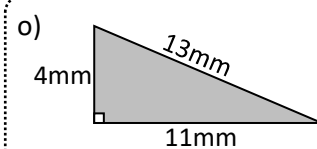
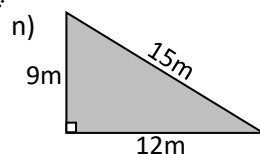
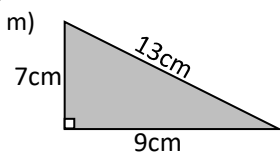
Name: _____



Calculate the length of the missing sides (x) of the triangles.



Determine if the following triangles are right angles or not.



Exam question:

2 joggers start a run from the same spot. The first travels east and the other south. They both jog for 14 miles at the same speed. How far apart are the two joggers? Give your answer to 1 decimal place.

