



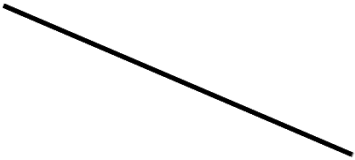
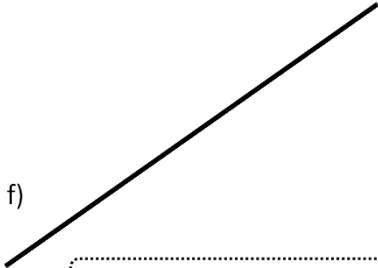





Name: \_\_\_\_\_



With a ruler, measure the length of the lines:

a) 	b) 	
c) 	d) 	
e) 	f) 	g) 

With a ruler, draw an accurate line which is :

h) 10 cm long

i) 12 cm long

j) 10.5 cm long

k) 135 mm long

l) 6.5 inches long

m) 72 mm long

n) 92mm long

 **Exam question:**

- a) Measure the length of BC
- b) How much longer is BC than AB?

