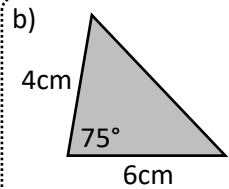
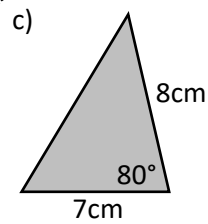
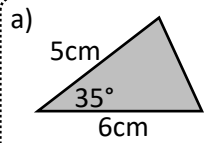


Name: _____

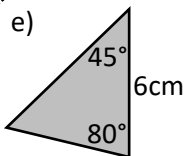
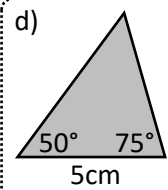


maths-school.co.uk

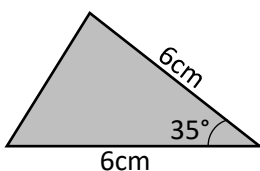
With a protractor and ruler, construct the triangles in the spaces provided:



With a protractor and ruler, construct the triangles in the spaces provided:



Exam question:
In the space provided, construct with a ruler and protractor an accurate diagram of the following.

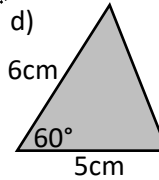
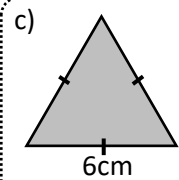
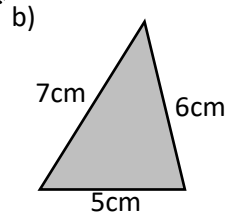
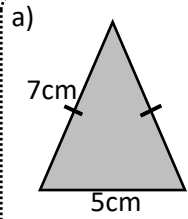




Name: _____



Use a ruler and a pair of compasses to construct the triangles in the spaces provided:



Exam question:

In the space provided, construct an accurate drawing of the following isosceles triangle.

