



Name: _____



Write down the value on the scale marked with the arrow:

a)

b)

c)

d)

e)

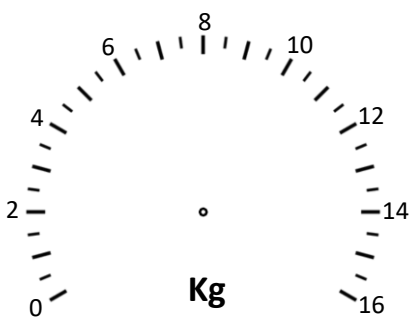
f)

g)

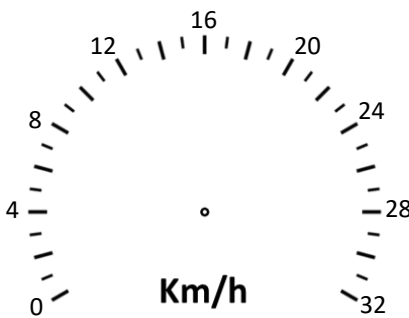
h)

i)


Mark on the scales the given measurements:



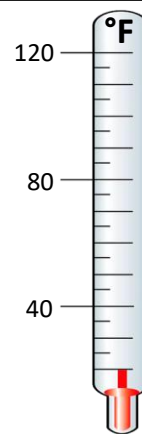
j) 11.5 Kg



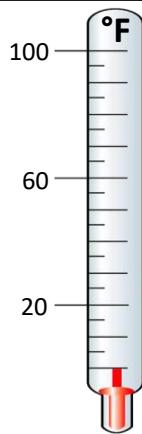
k) 23 Km/h



l) 15 °C



m) 90 °F



n) 75 °F

Exam question:

Write down the number represented by the arrow

