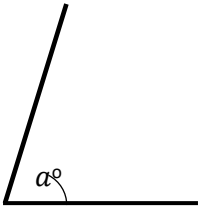


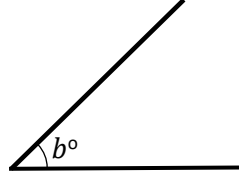


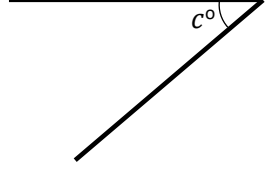
Name: _____

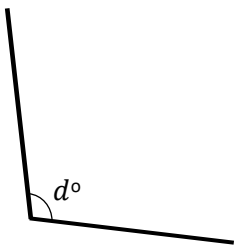


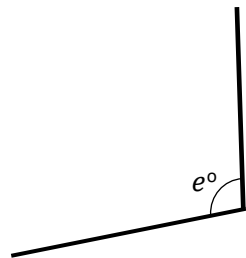
With a protractor, measure the angles of labelled a to f :

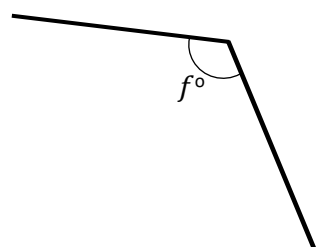
a) 

b) 

c) 

d) 

e) 

f) 

With a protractor and ruler, draw in the spaces provided the following angles:


a) 50°

b) 85°

c) 65°

d) 130°

e) 150°

 **Exam question:**
In the space provided, construct with a ruler and protractor an accurate diagram of the following.

