

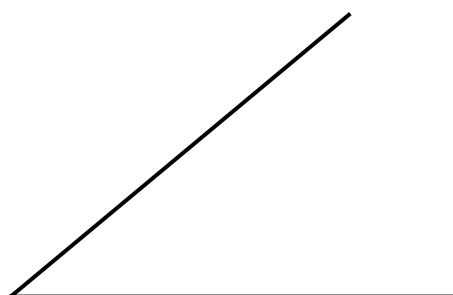
Name: _____



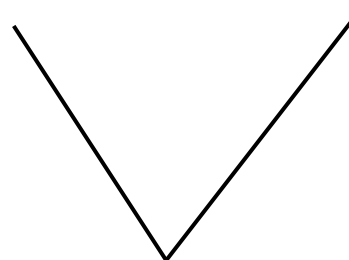
maths-school.co.uk

Construct an angle bisector for the angles shown (using a pair of compasses):

a)




b)



c)



d)



Exam question:

Using ruler and compasses, construct the bisector of angle ABC.
You **must** show all construction lines.

