



Name: \_\_\_\_\_



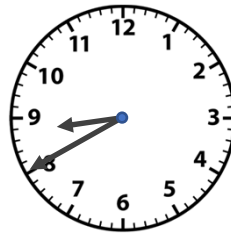
1) Read the times shown on these analogue clocks:



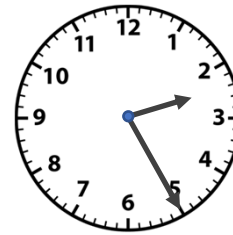
a) **05:15**



b) **07:00**



c) **08:40**



d) **02:25**




e) **08:55**

2) Draw the hands on these analogue clock faces to represent the times given:


a) 08 : 45




b) 02 : 20



c) 11 : 35



d) 09 : 25



e) 03 : 50



3) Convert these am/pm times to 24 hour time

a) 8 : 00 am **08:00**

d) 4 : 20 am **04:20**

g) 1 : 28 pm **13:28**

b) 6 : 15 am **06:15**

e) 9 : 15 pm **21:15**

h) 12 : 50 am **00:50**

c) 11 : 30 am **11:30**

f) 7 : 18 pm **19:18**

i) 8 : 45 pm **20:45**

4) Convert these 24 hour time times to am/pm times

a) 07 : 00 **7:00am**

d) 09 : 50 **9:50am**

g) 23 : 40 **11:40pm**

b) 09 : 15 **9:15am**

e) 18 : 15 **6:15pm**

h) 00 : 40 **12:40am**

c) 11 : 25 **11:25am**

f) 21 : 05 **9:05pm**

i) 23 : 10 **11:10pm**

5) What is:

a) Quarter past 5 in the afternoon in a 24 hour clock?

**17:15**

c) 45 minutes before midnight in a 24 hour clock

**23:15**

b) Half past midday in a 12 hour clock

**12:30pm**

d) 5 hours after 10:30pm in a 12 hour clock

**3:30am**

Exam question:

Using the clock shown:

a) write the time in a 12 hour format

**12:15am**

b) The time is shortly after midnight – write the time in a 24 hour format

**00:15**

