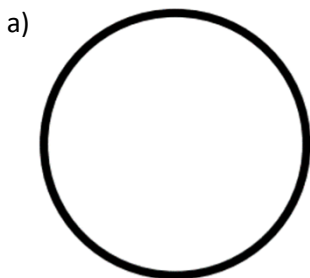




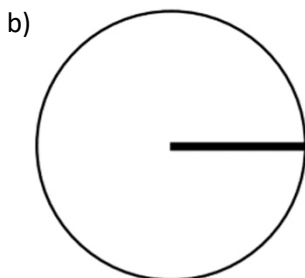
Name: _____



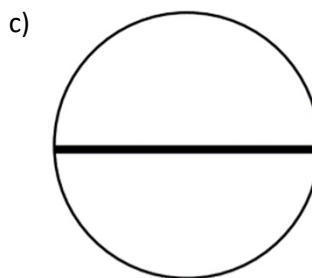
Identify the part of the circle which are highlighted in "bold" shown:



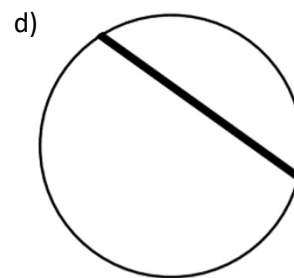
Circumference



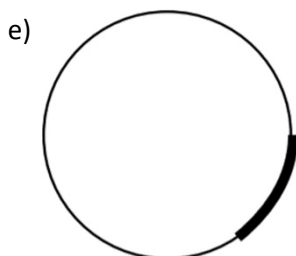
Radius



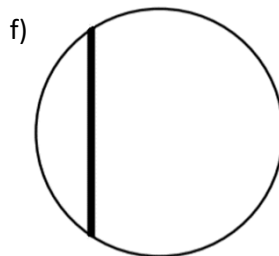
Diameter



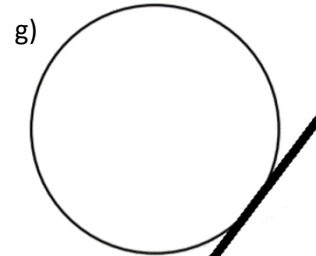
Chord



Arc

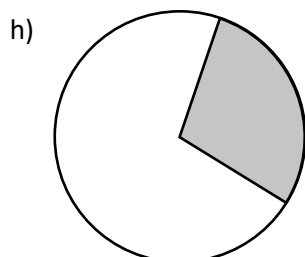


Chord

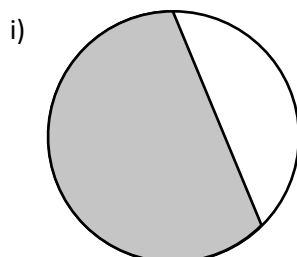


Tangent

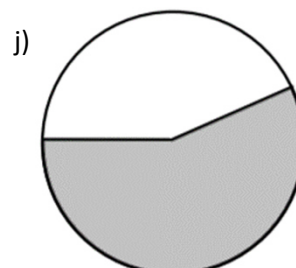
Identify the parts of the circle which are shaded:



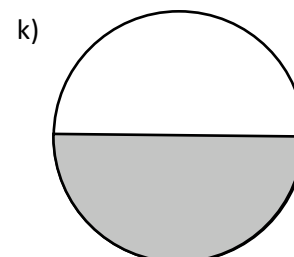
Sector



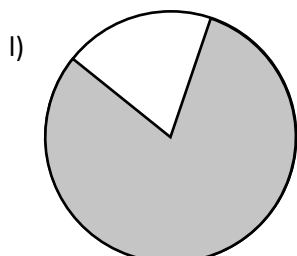
Segment



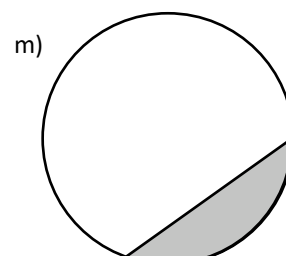
Sector



Segment



Sector



Segment

Exam question:

Points A, B, C and D are point on the circumference of a circle with centre O.
Choose the correct word to describe each line below.

- a) The straight line AC is a **Diameter** of the circle.
- b) The straight line AD is a **Chord** of the circle.

