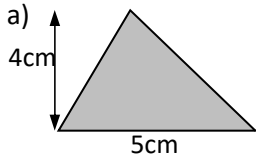




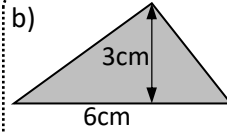
Name: _____



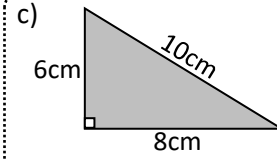
Calculate the area of these triangle. State the units of your answer.



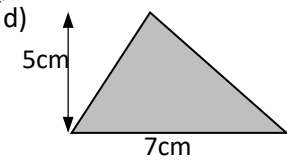
10cm²



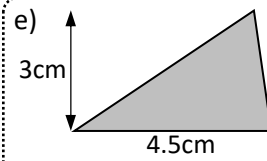
9cm²



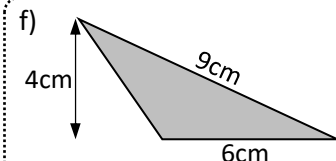
24cm²



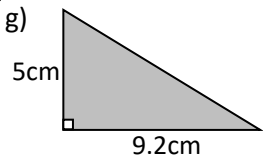
17.5cm²



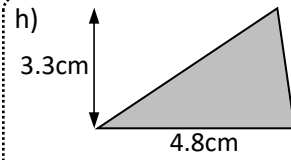
6.75cm²



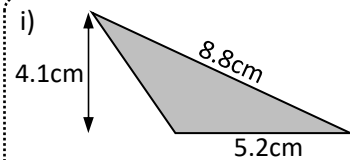
12cm²



23cm²

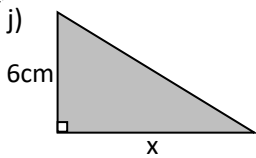


7.92cm²

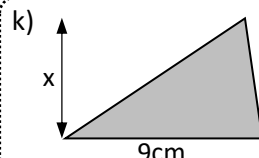


10.66cm²

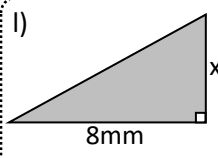
Calculate the value of x in the triangles:



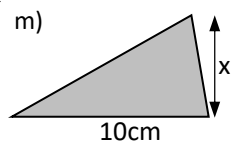
7cm



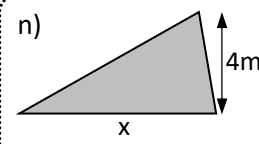
4cm



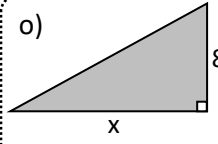
6mm



4.5cm



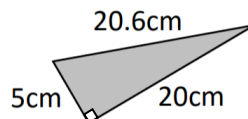
8.5cm



12.5m

Exam question:

Calculate the area of the triangle shown.
State the units of your answer.



50cm²

