

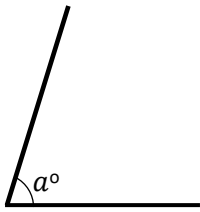
Name: _____



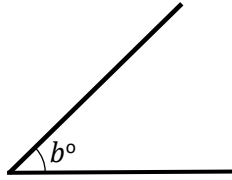
maths-school.co.uk

With a protractor, measure the angles of labelled a to f :

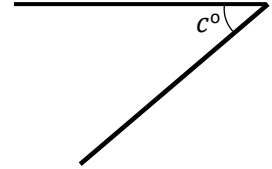
a)

**73°**

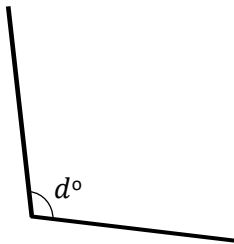
b)

**44°**

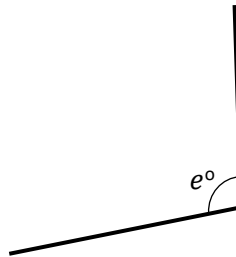
c)

**40°**

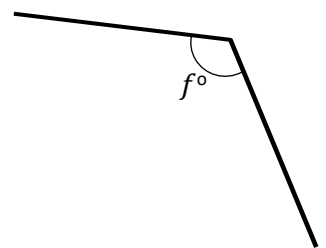
d)

**103°**

e)


**99°**

f)

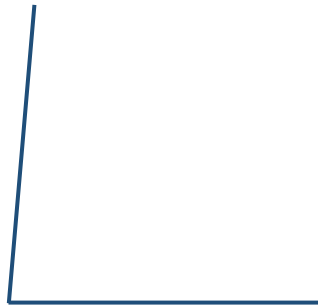
**119°**

With a protractor and ruler, draw in the spaces provided the following angles:

a) 50°



b) 85°



c) 65°



d) 130°



e) 150°

**Exam question:**

In the space provided, construct with a ruler and protractor an accurate diagram of the following.

