



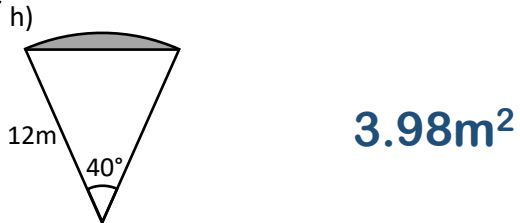


Name: _____



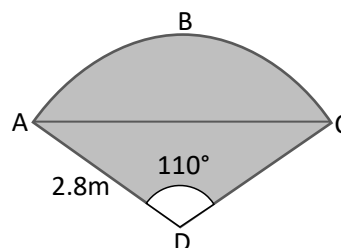
Calculate the area of the shaded segments (give your answer to 1 decimal place):

Diagrams not drawn to scale



Exam question:

A sector is split into two sections
Segment ABC and a triangle ACD.
Which section is biggest?
You must show your working



Triangle: 3.68m², Segment: 3.84m² so segment

