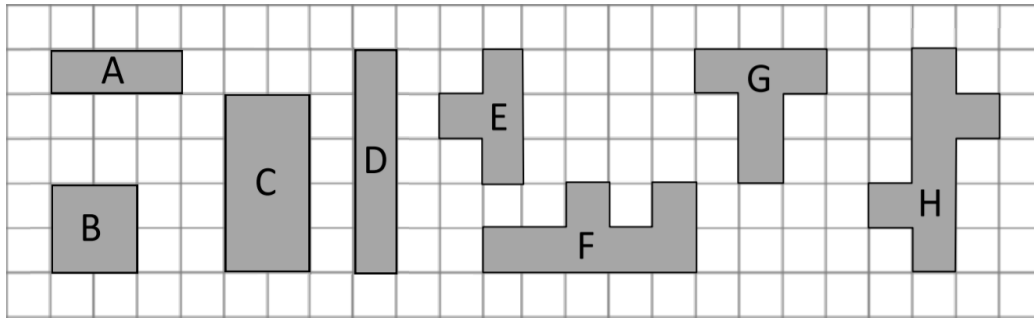




Name: \_\_\_\_\_



Calculate the perimeter of the shapes by counting:



A) 8

B) 8

C) 12

D) 12

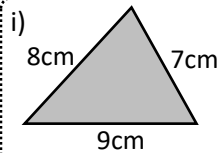
E) 10

F) 16

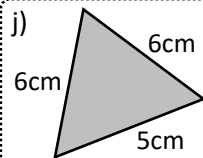
G) 12

H) 16

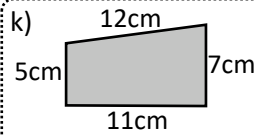
Calculate the perimeter of the shapes. State the units of your answer.



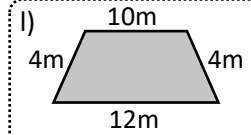
24cm



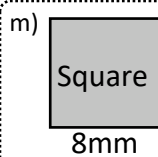
17cm



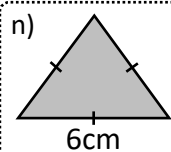
35cm



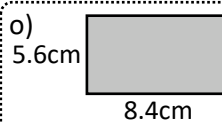
30m



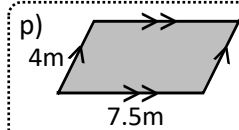
32mm



18cm

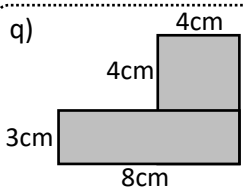


28cm

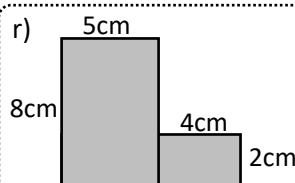


23m

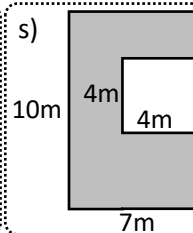
Find the perimeter of the compound shapes:



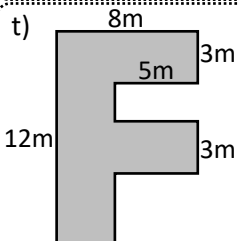
30cm



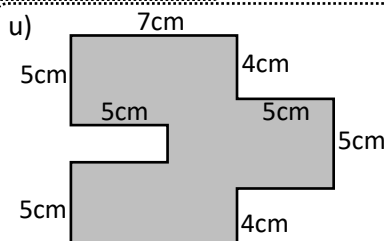
34cm



42m



50m



60cm

**Exam question:**

ABCD is a square. ABE is an equilateral triangle. The perimeter of the triangle is 48cm. Find the perimeter of the square.

64cm

