

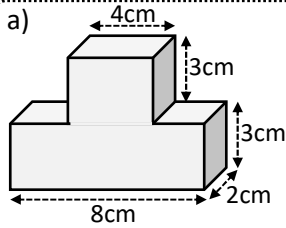


Name: _____

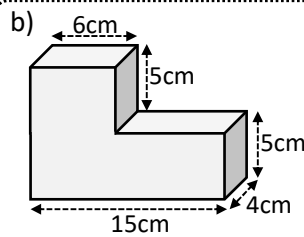


Practice questions: Calculate the volume of these 3D shapes

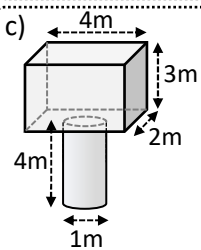
Diagrams not drawn to scale



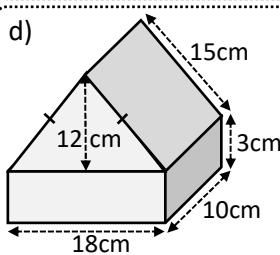
72cm^3



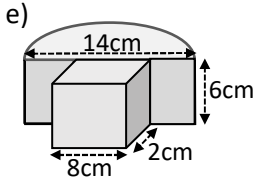
220cm^3



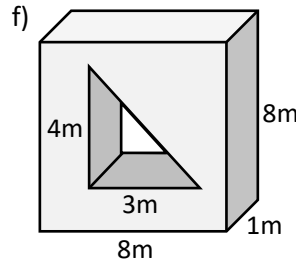
27.14m^3



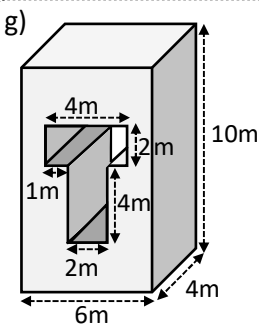
1620cm^3



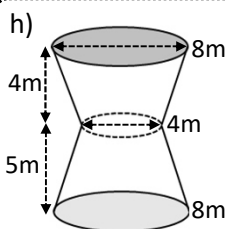
557.81cm^3



58m^3



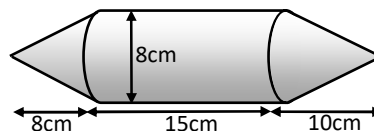
176m^3



282.74m^3

Exam question:

Calculate the volume of the shape shown
Leave your answer correct to 1 decimal place



1055.6cm^3

