

Surface area of a pyramid

123



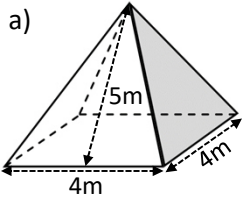
maths-school.co.uk

Name: _____

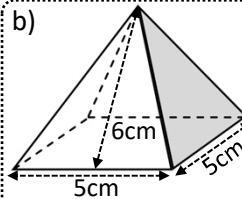


Calculate the total **surface area** of these pyramids:

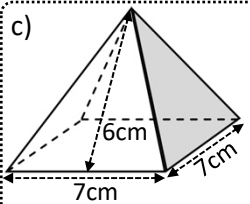
Diagrams not drawn to scale



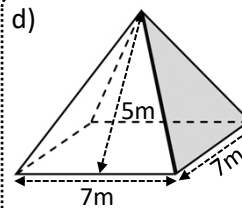
56m²



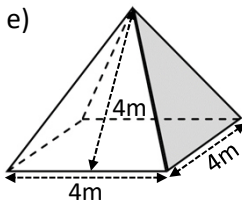
85cm²



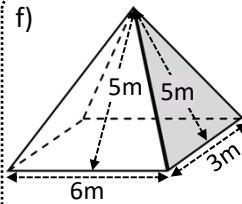
133cm²



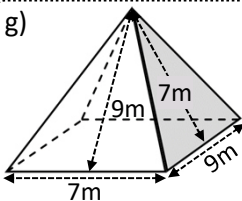
119m²



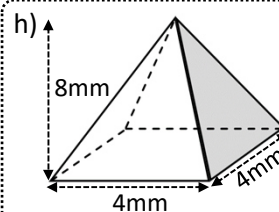
48m²



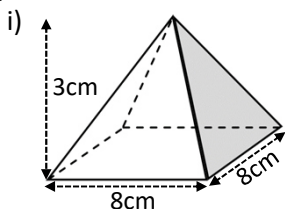
63m²



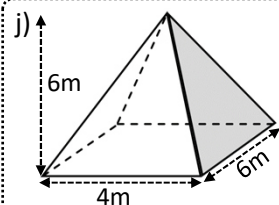
189m²



82.0mm²



144cm²



88.8m²



Exam question:

A square-based pyramid has a base with side length 8cm.
The perpendicular height of the pyramid is 12cm.
Calculate the surface area of the pyramid to the nearest cm².

266cm²

