

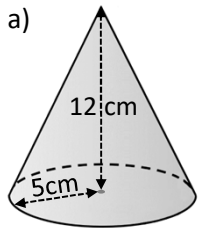


Name: _____

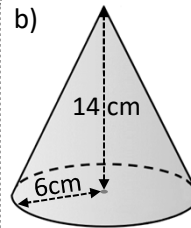


Calculate the **volume** of these cones (give your answer to 1 decimal place):

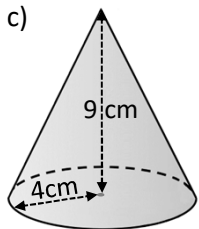
Diagrams not drawn to scale



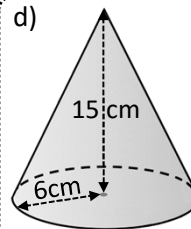
314.2cm³



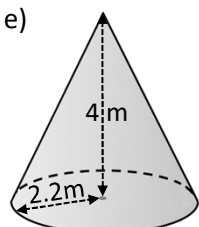
527.8cm³



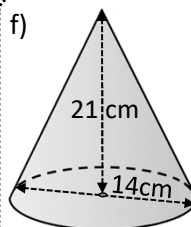
150.8cm³



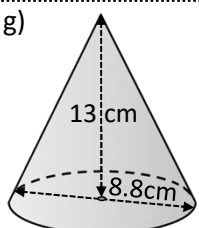
565.5cm³



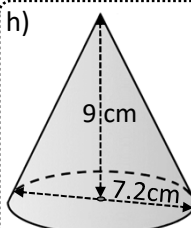
20.3m³



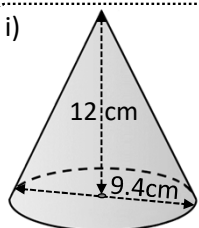
1077.6cm³



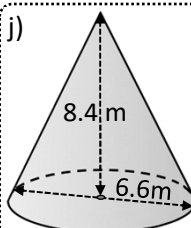
263.6cm³



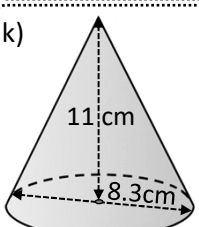
122.1cm³



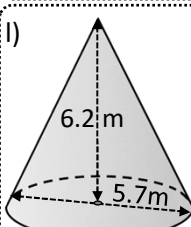
277.6cm³



95.8m³



198.4cm³



52.7cm³

Exam question:

A cone has base diameter of 21cm and perpendicular height 30cm.
Work out the volume of the cone.
Give your answer to the nearest one decimal place.

4154.8cm³



Volume of a cone (given slope length)

122b



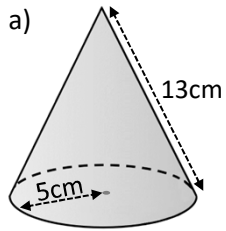
maths-school.co.uk

Name: _____

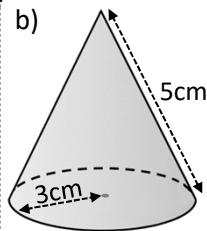


Calculate the **volume** of these cones (give your answer to 1 decimal place):

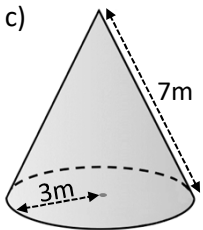
Diagrams not drawn to scale



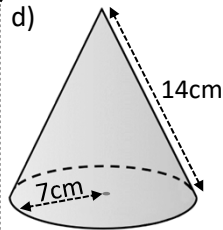
314.2cm³



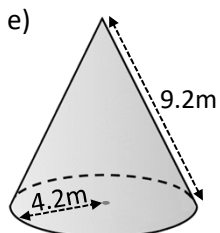
37.7cm³



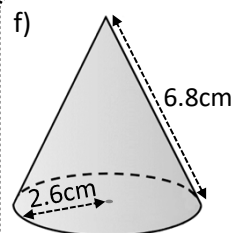
59.6m³



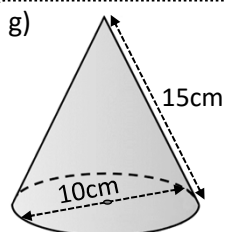
622.1cm³



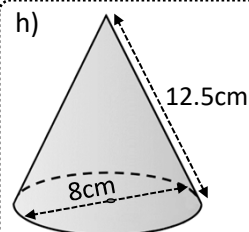
151.2m³



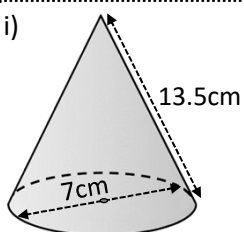
44.5cm³



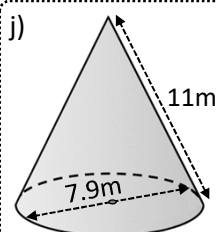
370.2cm³



198.4cm³



167.3cm³



167.7m³

Exam question:

A cone has base radius 12cm and slant height 20cm.
Work out **the volume** of the cone.
Give your answer **in terms of π**

768 π cm³

